



Cambridge IGCSE[®]

CANDIDATE
NAME

--

CENTRE
NUMBER

--	--	--	--	--

CANDIDATE
NUMBER

--	--	--	--



ADDITIONAL MATHEMATICS

0606/02

Paper 2

For examination from 2020

SPECIMEN PAPER

2 hours

You must answer on the question paper.

No additional materials are needed.

INSTRUCTIONS

- Answer **all** questions.
- Use a black or dark blue pen. You may use an HB pencil for any diagrams or graphs.
- Write your name, centre number and candidate number in the boxes at the top of the page.
- Write your answer to each question in the space provided.
- Do **not** use an erasable pen or correction fluid.
- Do **not** write on any bar codes.
- You should use a calculator where appropriate.
- You must show all necessary working clearly; no marks will be given for unsupported answers from a calculator.
- Give non-exact numerical answers correct to 3 significant figures, or 1 decimal place for angles in degrees, unless a different level of accuracy is specified in the question.

INFORMATION

- The total mark for this paper is 80.
- The number of marks for each question or part question is shown in brackets [].

This document has **16** pages. Blank pages are indicated.

*Mathematical Formulae***1. ALGEBRA***Quadratic Equation*

For the equation $ax^2 + bx + c = 0$,

$$x = \frac{-b \pm \sqrt{b^2 - 4ac}}{2a}$$

Binomial Theorem

$$(a + b)^n = a^n + \binom{n}{1}a^{n-1}b + \binom{n}{2}a^{n-2}b^2 + \dots + \binom{n}{r}a^{n-r}b^r + \dots + b^n,$$

where n is a positive integer and $\binom{n}{r} = \frac{n!}{(n-r)!r!}$

Arithmetic series

$$u_n = a + (n-1)d$$

$$S_n = \frac{1}{2}n(a+l) = \frac{1}{2}n\{2a + (n-1)d\}$$

Geometric series

$$u_n = ar^{n-1}$$

$$S_n = \frac{a(1-r^n)}{1-r} \quad (r \neq 1)$$

$$S_\infty = \frac{a}{1-r} \quad (|r| < 1)$$

2. TRIGONOMETRY*Identities*

$$\sin^2 A + \cos^2 A = 1$$

$$\sec^2 A = 1 + \tan^2 A$$

$$\operatorname{cosec}^2 A = 1 + \cot^2 A$$

Formulae for $\triangle ABC$

$$\frac{a}{\sin A} = \frac{b}{\sin B} = \frac{c}{\sin C}$$

$$a^2 = b^2 + c^2 - 2bc \cos A$$

$$\Delta = \frac{1}{2} bc \sin A$$

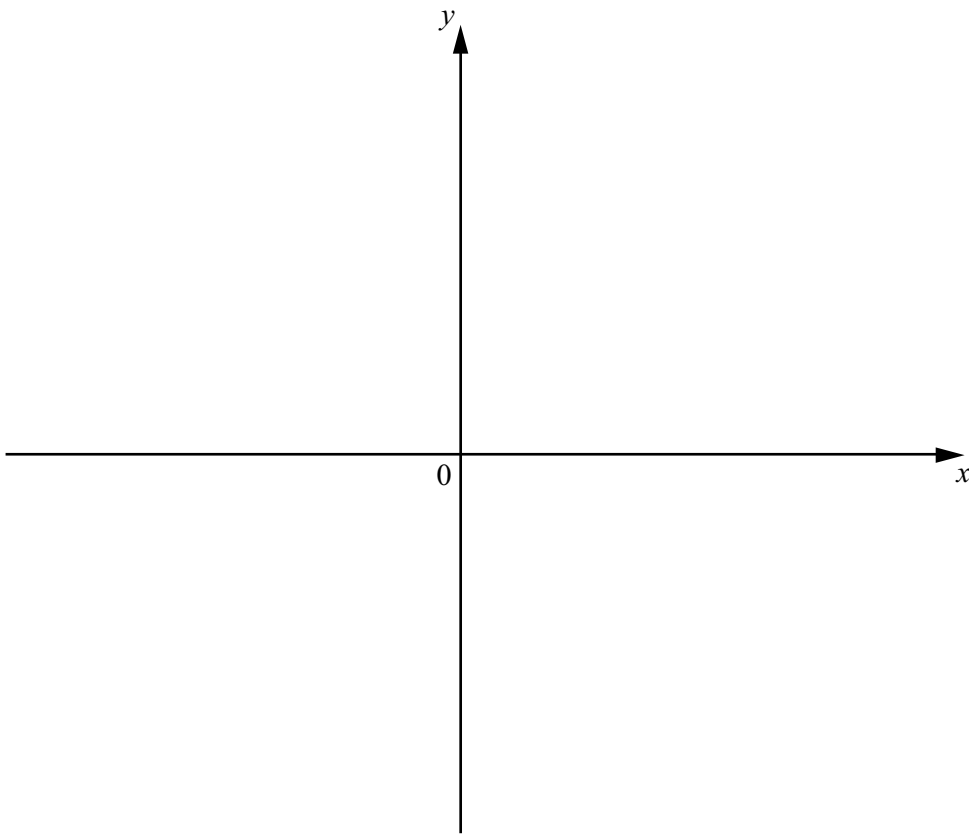
1 Solve

$$xy = 3,$$

$$x^4y^5 = 486.$$

[3]

- 2 (a) On the axes below, sketch the graph of $y = \frac{1}{5}(x - 2)(x - 4)(x + 5)$, showing the coordinates of the points where the graph meets the coordinate axes.



[2]

- (b) Explain why your sketch in part (a) can be used to solve $(x - 2)(x - 4)(x + 5) \leq 0$.

[1]

- (c) Hence solve $(x - 2)(x - 4)(x + 5) \leq 0$.

[1]

3 Functions g and h are such that

$$\begin{aligned}g(x) &= 2 + 4 \ln x && \text{for } x > 0, \\h(x) &= x^2 + 4 && \text{for } x > 0.\end{aligned}$$

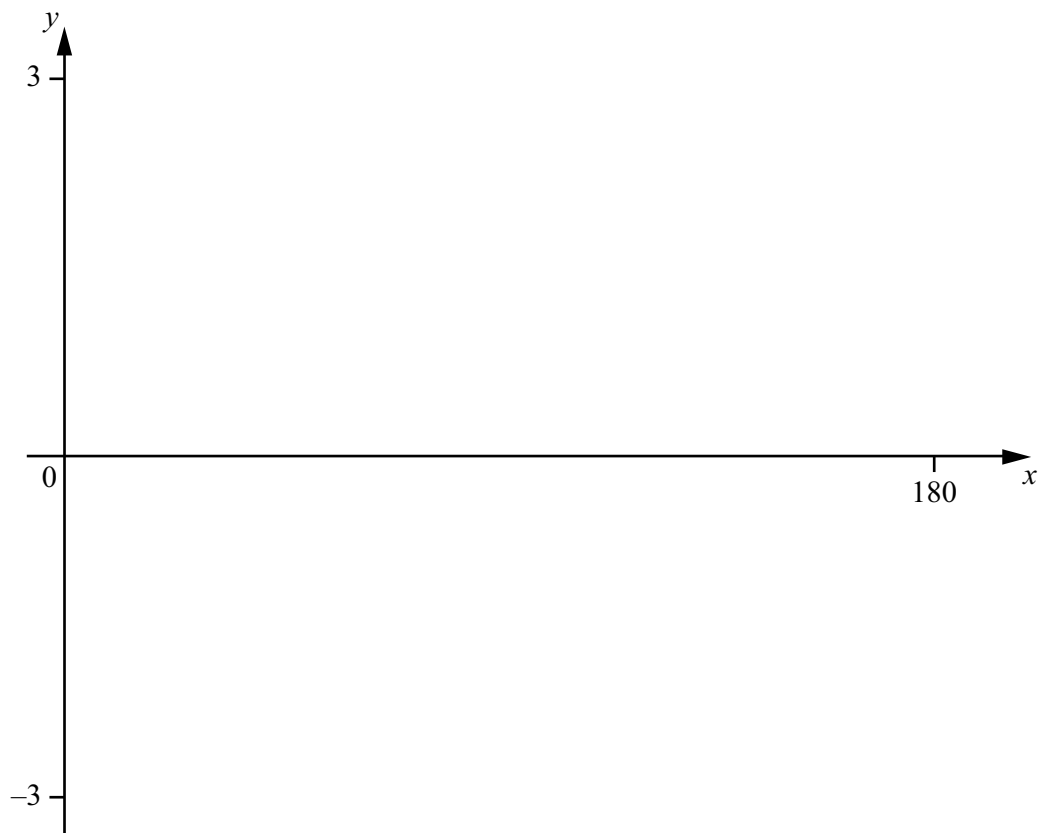
(a) Find g^{-1} , stating its domain and its range. [4]

(b) Solve $gh(x) = 10$. [3]

(c) Solve $g'(x) = h'(x)$.

[3]

- 4 On the axes below, sketch the graph of $y = 2 \sin \frac{3}{2}x - 1$ for $0^\circ \leq x \leq 180^\circ$, showing the coordinates of the points where the graph meets the coordinate axes. [4]



5 (a) A 6-character password is to be chosen from the following 9 characters.

letters A B E F

numbers 5 8 9

symbols * \$

Each character may be used only once in any password.

Find the number of different 6-character passwords that may be chosen if

(i) there are no restrictions, [1]

(ii) the password consists of 2 letters, 2 numbers and 2 symbols in that order, [2]

(iii) the password must start and finish with a symbol. [2]

- (b) An examination consists of a section A, containing 10 short questions, and a section B containing 5 long questions. Candidates are required to answer 6 questions from section A and 3 questions from section B.

Find the number of different selections of questions that can be made if

- (i) there are no further restrictions, [2]

- (ii) candidates must answer the first 2 questions in section A and the first question in section B. [2]

6 A particle P travels in a straight line such that, t s after passing through a fixed point O , its velocity v m s⁻¹ is given by $v = \left(\frac{t^2}{e^8} - 4\right)^3$.

(a) Find the speed of P at O . [1]

(b) Find the value of t for which P is instantaneously at rest. [2]

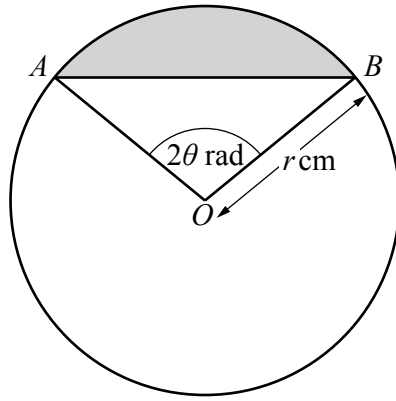
(c) Find the acceleration of P when $t = 1$. [4]

7 Variables x and y are such that when $\lg y$ is plotted against x^2 , a straight line graph passing through the points $(1, 0.73)$ and $(4, 0.10)$ is obtained.

(a) Given that $y = Ab^{x^2}$, find the value of each of the constants A and b . [4]

(b) Find the value of y when $x = 1.5$. [2]

(c) Find the positive value of x when $y = 2$. [2]

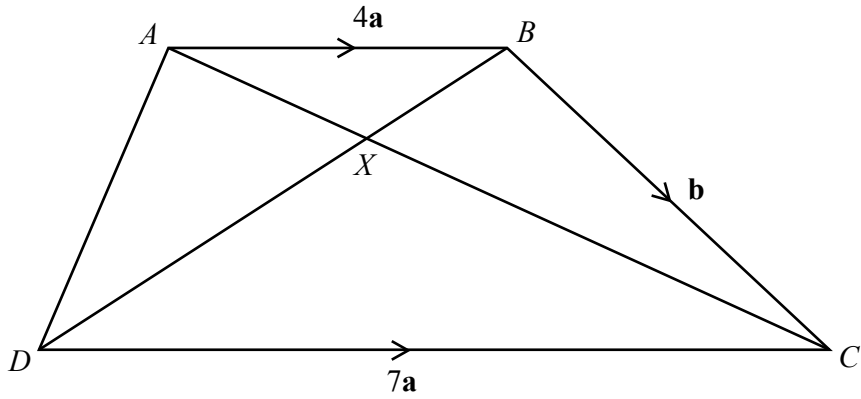


The diagram shows a circle, centre O , radius r cm. The points A and B lie on the circle such that angle $AOB = 2\theta$ radians.

- (a) Given that the perimeter of the shaded region is 20 cm, show that $r = \frac{10}{\theta + \sin \theta}$. [3]

(b) Given that r and θ can vary, find the value of $\frac{dr}{d\theta}$ when $\theta = \frac{\pi}{6}$. [4]

9



In the diagram $\vec{AB} = 4\mathbf{a}$, $\vec{BC} = \mathbf{b}$ and $\vec{DC} = 7\mathbf{a}$. The lines AC and DB intersect at the point X .

Find, in terms of \mathbf{a} and \mathbf{b} ,

(a) \vec{DB} , [1]

(b) \vec{DA} . [1]

Given that $\vec{AX} = \lambda \vec{AC}$ find, in terms of \mathbf{a} , \mathbf{b} and λ ,

(c) \vec{AX} , [1]

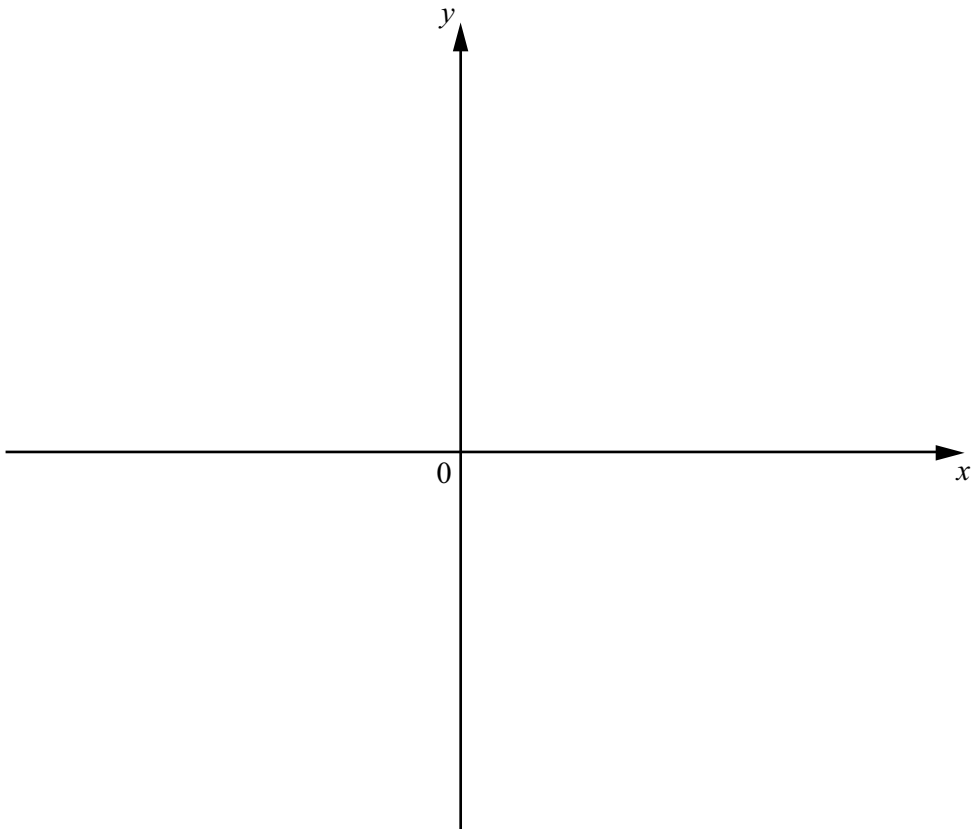
(d) \vec{DX} . [2]

Given that $\overrightarrow{DX} = \mu \overrightarrow{DB}$,

(e) find the value of λ and of μ .

[4]

- 10 (a) (i) Sketch the graph of $y = e^x - 5$ on the axes below, showing the exact coordinates of any points where the graph cuts the coordinate axes.



[3]

- (ii) Find the range of values of k for which the equation $e^x - 5 = k$ has no solutions.

[1]

- (b) Simplify $\log_a \sqrt{2} + \log_a 8 + \log_a \left(\frac{1}{2}\right)$, giving your answer in the form $p \log_a 2$, where p is a constant. [2]

- (c) Solve the equation $\log_3 x - \log_9 4x = 1$. [4]

Question 11 is printed on the next page.

11 (a) (i) Show that $\frac{\operatorname{cosec} \theta}{\operatorname{cosec} \theta - \sin \theta} = \sec^2 \theta$. [3]

(ii) Hence solve $\frac{2 \operatorname{cosec} \phi}{\operatorname{cosec} \phi - \sin \phi} = 8$ for $0^\circ < \phi < 360^\circ$. [3]

(b) Solve $\sqrt{3} \tan\left(x + \frac{\pi}{4}\right) = 1$ for $0 < x < 2\pi$, giving your answers in terms of π . [3]

Permission to reproduce items where third-party owned material protected by copyright is included has been sought and cleared where possible. Every reasonable effort has been made by the publisher (UCLES) to trace copyright holders, but if any items requiring clearance have unwittingly been included, the publisher will be pleased to make amends at the earliest possible opportunity.

Cambridge Assessment International Education is part of the Cambridge Assessment Group. Cambridge Assessment is the brand name of University of Cambridge Local Examinations Syndicate (UCLES), which itself is a department of the University of Cambridge.